

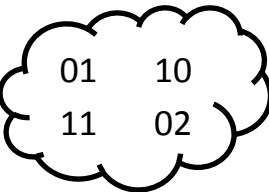


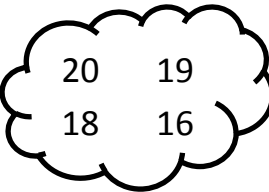

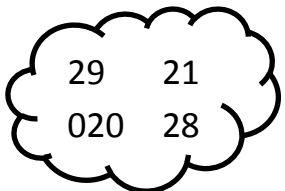
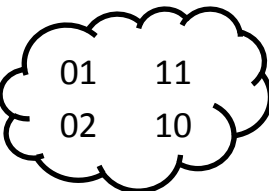

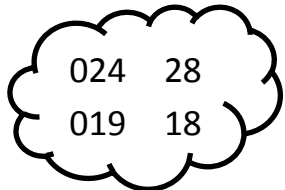
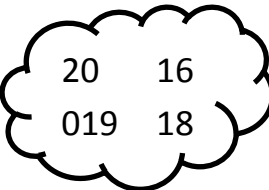


Comparer et Ordonner des Nombres. (0 à 30) -04

Exercice 1 : Dans chaque bulle, entoure le nombre le plus **grand**.

 <table border="0"> <tr><td>08</td><td>16</td></tr> <tr><td>25</td><td>19</td></tr> </table>	08	16	25	19	 <table border="0"> <tr><td>29</td><td>17</td></tr> <tr><td>09</td><td>21</td></tr> </table>	29	17	09	21	 <table border="0"> <tr><td>01</td><td>10</td></tr> <tr><td>11</td><td>02</td></tr> </table>	01	10	11	02
08	16													
25	19													
29	17													
09	21													
01	10													
11	02													
 <table border="0"> <tr><td>27</td><td>25</td></tr> <tr><td>26</td><td>28</td></tr> </table>	27	25	26	28	 <table border="0"> <tr><td>24</td><td>14</td></tr> <tr><td>18</td><td>19</td></tr> </table>	24	14	18	19	 <table border="0"> <tr><td>20</td><td>19</td></tr> <tr><td>18</td><td>16</td></tr> </table>	20	19	18	16
27	25													
26	28													
24	14													
18	19													
20	19													
18	16													

Exercice 2 : Dans chaque bulle, entoure le nombre le plus **petit**.

 <table border="0"> <tr><td>08</td><td>19</td></tr> <tr><td>16</td><td>24</td></tr> </table>	08	19	16	24	 <table border="0"> <tr><td>29</td><td>21</td></tr> <tr><td>020</td><td>28</td></tr> </table>	29	21	020	28	 <table border="0"> <tr><td>01</td><td>11</td></tr> <tr><td>02</td><td>10</td></tr> </table>	01	11	02	10
08	19													
16	24													
29	21													
020	28													
01	11													
02	10													
 <table border="0"> <tr><td>25</td><td>28</td></tr> <tr><td>27</td><td>26</td></tr> </table>	25	28	27	26	 <table border="0"> <tr><td>024</td><td>28</td></tr> <tr><td>019</td><td>18</td></tr> </table>	024	28	019	18	 <table border="0"> <tr><td>20</td><td>16</td></tr> <tr><td>019</td><td>18</td></tr> </table>	20	16	019	18
25	28													
27	26													
024	28													
019	18													
20	16													
019	18													

Exercice 3 : Range ces nombres dans l'ordre croissant.

28 | 24 | 26 | 08 | 14 | 7 →



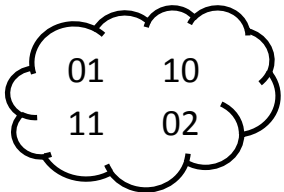


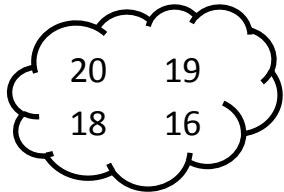
--	--	--	--	--	--

3 | 30 | 13 | 23 | 8 | 27 →


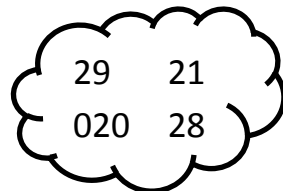
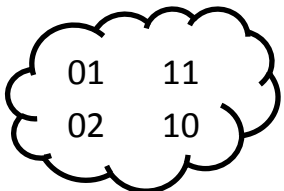

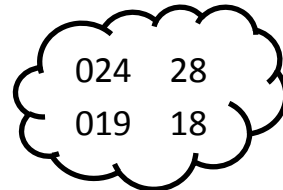
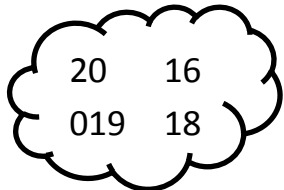
--	--	--	--	--	--

Comparer et Ordonner des Nombres. (0 à 30) -04

Exercice 1 : Dans chaque bulle, entoure le nombre le plus **grand**.

 <table border="0"> <tr><td>08</td><td>16</td></tr> <tr><td>25</td><td>19</td></tr> </table>	08	16	25	19	 <table border="0"> <tr><td>29</td><td>17</td></tr> <tr><td>09</td><td>21</td></tr> </table>	29	17	09	21	 <table border="0"> <tr><td>01</td><td>10</td></tr> <tr><td>11</td><td>02</td></tr> </table>	01	10	11	02
08	16													
25	19													
29	17													
09	21													
01	10													
11	02													
 <table border="0"> <tr><td>27</td><td>25</td></tr> <tr><td>26</td><td>28</td></tr> </table>	27	25	26	28	 <table border="0"> <tr><td>24</td><td>14</td></tr> <tr><td>18</td><td>19</td></tr> </table>	24	14	18	19	 <table border="0"> <tr><td>20</td><td>19</td></tr> <tr><td>18</td><td>16</td></tr> </table>	20	19	18	16
27	25													
26	28													
24	14													
18	19													
20	19													
18	16													

Exercice 2 : Dans chaque bulle, entoure le nombre le plus **petit**.

 <table border="0"> <tr><td>08</td><td>19</td></tr> <tr><td>16</td><td>24</td></tr> </table>	08	19	16	24	 <table border="0"> <tr><td>29</td><td>21</td></tr> <tr><td>020</td><td>28</td></tr> </table>	29	21	020	28	 <table border="0"> <tr><td>01</td><td>11</td></tr> <tr><td>02</td><td>10</td></tr> </table>	01	11	02	10
08	19													
16	24													
29	21													
020	28													
01	11													
02	10													
 <table border="0"> <tr><td>25</td><td>28</td></tr> <tr><td>27</td><td>26</td></tr> </table>	25	28	27	26	 <table border="0"> <tr><td>024</td><td>28</td></tr> <tr><td>019</td><td>18</td></tr> </table>	024	28	019	18	 <table border="0"> <tr><td>20</td><td>16</td></tr> <tr><td>019</td><td>18</td></tr> </table>	20	16	019	18
25	28													
27	26													
024	28													
019	18													
20	16													
019	18													

Exercice 3 : Range ces nombres dans l'ordre croissant.

28 | 24 | 26 | 08 | 14 | 7 →

--	--	--	--	--	--

3 | 30 | 13 | 23 | 8 | 27 →

--	--	--	--	--	--